


Let's Think About Numbers 1-100



Write the missing numbers.

1									
									100


Let's Think About Numbers 1-100



Write the missing numbers.

1		3		5		7		9	
11		13		15		17		19	
21		23		25		27		29	
31		33		35		37		39	
41		43		45		47		49	
51		53		55		57		59	
61		63		65		67		69	
71		73		75		77		79	
81		83		85		87		89	
91		93		95		97		99	

Let's Think About Numbers 1-100



Write the missing numbers.

1	2		4	5		7	8		10
11		13	14		16	17		19	20
	22	23		25	26		28	29	
31	32		34	35		37	38		40
41		43	44		46	47		49	50
	52	53		55	56		58	59	
61	62		64	65		67	68		70
71		73	74		76	77		79	80
	82	83		85	86		88	89	
91	92		94	95		97	98		100

Let's Think About Numbers 1-100



Write the missing numbers.

1	2	3		5	6	7		9	10
11		13	14	15		17	18	19	
21	22	23		25	26	27		29	30
31		33	34	35		37	38	39	
41	42	43		45	46	47		49	50
51		53	54	55		57	58	59	
61	62	63		65	66	67		69	70
71		73	74	75		77	78	79	
81	82	83		85	86	87		89	90
91		93	94	95		97	98	99	

Let's Think About Numbers 1-100



Write the missing numbers.

1		3		5		7		9	
11		13		15		17		19	
21		23		25		27		29	
31		33		35		37		39	
41		43		45		47		49	
51		53		55		57		59	
61		63		65		67		69	
71		73		75		77		79	
81		83		85		87		89	
91		93		95		97		99	


Let's Think About Numbers 1-100



Write the missing numbers.

	2		4		6		8		10
	12		14		16		18		20
	22		24		26		28		30
	32		34		36		38		40
	42		44		46		48		50
	52		54		56		58		60
	62		64		66		68		70
	72		74		76		78		80
	82		84		86		88		90
	92		94		96		98		100

Let's Think About Numbers 1-100



Write the missing numbers.

1			4		6	7	8		10
	12	13		15		17		19	20
21		23	24		26		28		
31	32		34			37		39	40
		43			46		48		50
	52		54		56			59	60
61		63		65		67			70
	72		74		76		78	79	
81		83		85		87		89	90
91	92		94			97	98		100